


CH-15

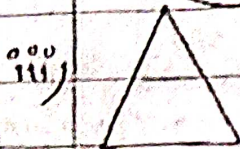
Q1. Match the 2 dimensional figures with the name.



i) Circle




ii) Rectangle



iii) Square


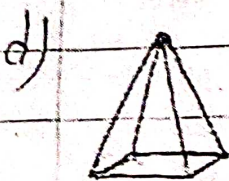


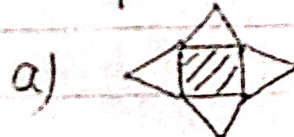


iv) Quadrilateral



v) Triangle

Q2. Match the nets with appropriate solids:



Q3. What cross-sections do you get when you give a →

i) Vertical cut

ii) horizontal cut